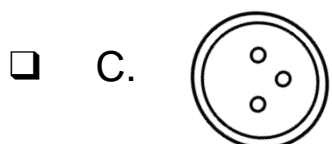



Test may be read aloud to students.

Student Name: _____

Date: _____

1. Which button has 2 holes?

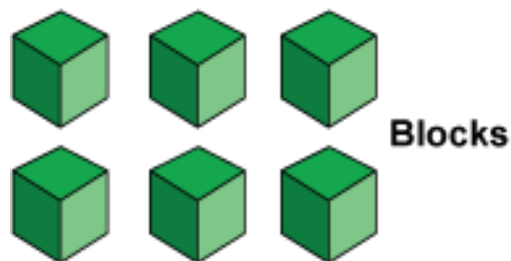


2. Are there more blocks or shells?

A. There are more blocks.

B. There are more shells.

C. The blocks and shells are the same.



3. How many dots do you see?

A. 4

B. 5

C. 6



Test may be read aloud to students.


4. Which sentence is true?

- A. The bear is above the jar.
- B. The bear is below the jar.
- C. The bear is beside the jar.





5. Count the squares and choose the correct number?

- A. 5
- B. 6
- C. 7



6. Which hand shows 3 fingers up?

- A. 
- B. 
- C. 